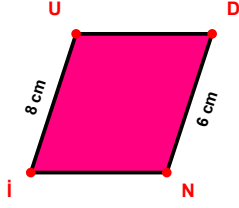
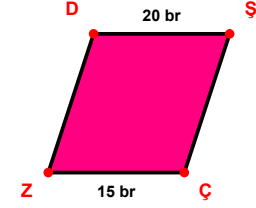


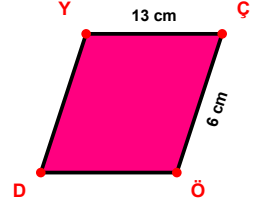
SORU: Aşağıdaki şekillerde verilen, kenar uzunlukları farklarını bulunuz.



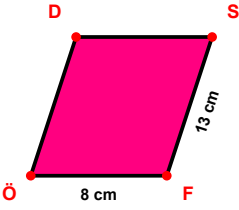
$$|IU| - |DN| = \dots\dots\dots$$



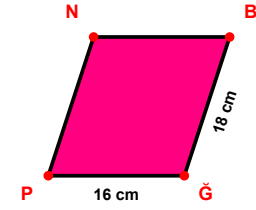
$$|DŞ| - |ÇZ| = \dots\dots\dots$$



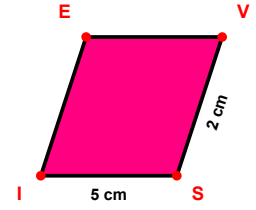
$$|YÇ| - |ÇÖ| = \dots\dots\dots$$



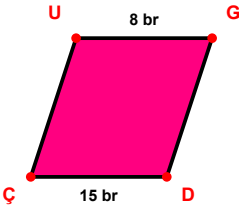
$$|SF| - |FÖ| = \dots\dots\dots$$



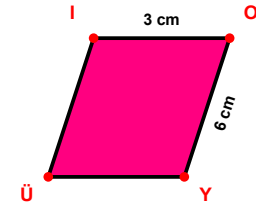
$$|BĞ| - |ĞP| = \dots\dots\dots$$



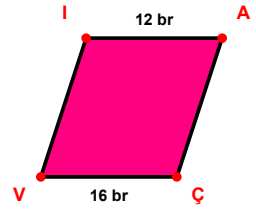
$$|SI| - |VS| = \dots\dots\dots$$



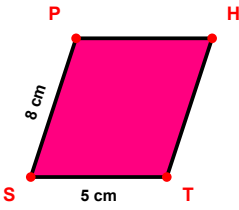
$$|DÇ| - |UG| = \dots\dots\dots$$



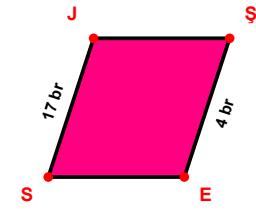
$$|OY| - |İO| = \dots\dots\dots$$



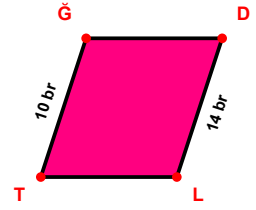
$$|ÇV| - |İA| = \dots\dots\dots$$



$$|SP| - |TS| = \dots\dots\dots$$

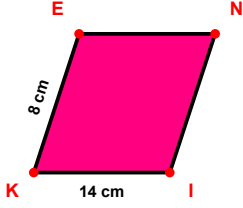


$$|SJ| - |ŞE| = \dots\dots\dots$$

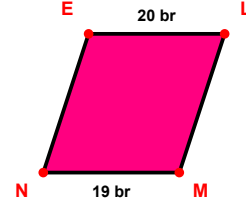


$$|DL| - |TĞ| = \dots\dots\dots$$

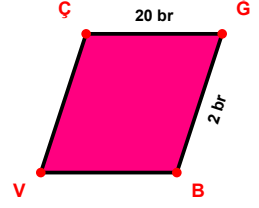
SORU: Aşağıdaki şekillerde verilen, kenar uzunlukları farklarını bulunuz.



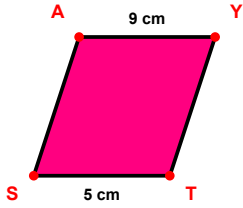
$$|IK| - |KE| = \dots\dots$$



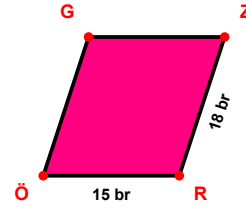
$$|EL| - |MN| = \dots\dots$$



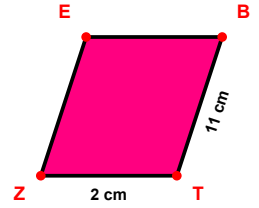
$$|ÇĞ| - |ĞB| = \dots\dots$$



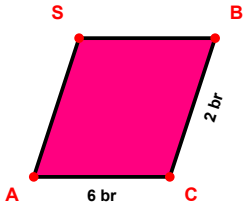
$$|AY| - |TS| = \dots\dots$$



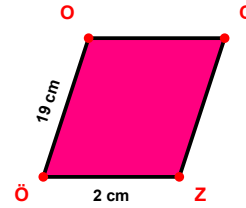
$$|ZR| - |RÖ| = \dots\dots$$



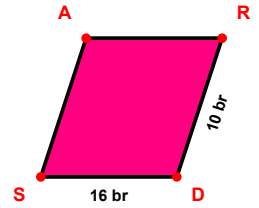
$$|BT| - |TZ| = \dots\dots$$



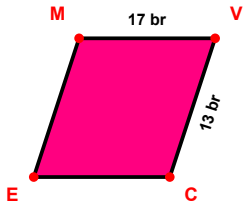
$$|CA| - |BC| = \dots\dots$$



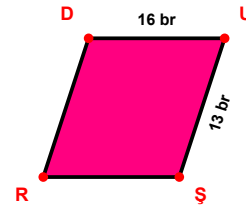
$$|ÖO| - |ZÖ| = \dots\dots$$



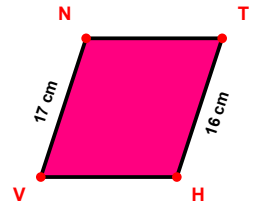
$$|DS| - |RD| = \dots\dots$$



$$|MV| - |VC| = \dots\dots$$



$$|DU| - |UŞ| = \dots\dots$$



$$|VN| - |TH| = \dots\dots$$

SÜREÇ ODAKLI DEĞERLENDİRME ÖLÇEĞİ

Doğru Sayısı: / 24

Öğretmen ilgili kutucuğu işaretler.

Geliştirilmeli (0-8)

İyi (9-14)

Çok İyi (15-20)

Mükemmel (21-24)

☐
☐
☐
☐

Hazırlayan:

Bu bölüme sınıfınızın ilgili kazanıma yönelik genel durumuna ilişkin gözlem ve izlenimlerinizi, öğrencilerinizin bu kazanımla ilgili öğrenme eksikliklerini ve bu eksikliklerin giderilmesi amacıyla yaptığınız/yapmayı planladığınız faaliyetleri not edebilirsiniz.

No	Adı - Soyadı	Toplam Puan	Değerlendirme
1			
2			
3			
4			
5			
6			
7			
8			
9			
10			
11			
12			
13			
14			
15			
16			
17			
18			
19			
20			
21			
22			
23			
24			
25			
26			
27			
28			
29			
30			
31			
32			
33			
34			
35			

Hazırlayan: